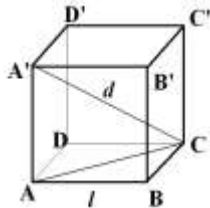


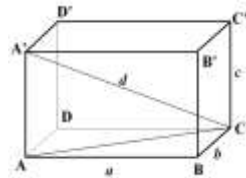
FIȘĂ DE LUCRU

I. În spațiile punctate, scrieți denumirea fiecărui corp geometric.

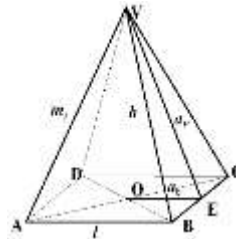
1)



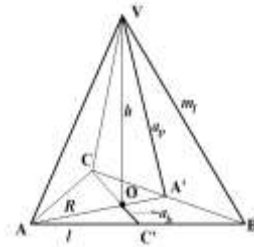
2)



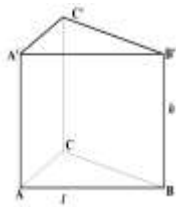
3)



4)



5)



.....

II. Completează spațiile punctate :

1) Dacă am 6 fețe sub formă de pătrat mă numesc.....

Și eu am 6 fețe dar de dreptunghi! Sunt deci, un.....

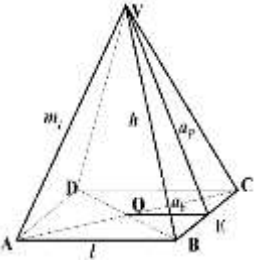
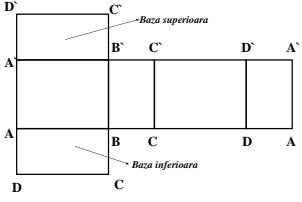
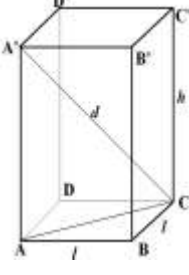
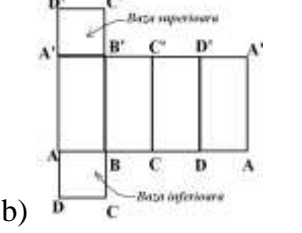
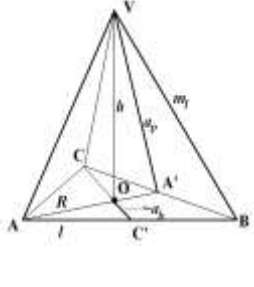
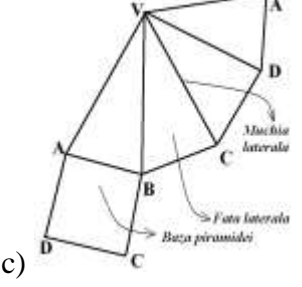
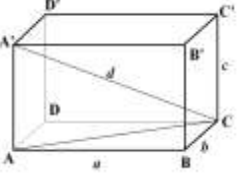
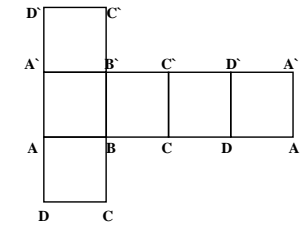
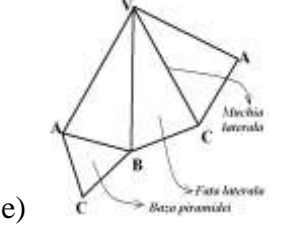
Fiecare avem câtemuchii și câte.....vârfuri.

2) Volumul paralelipipedului dreptunghic cu dimensiunile de lungimi 5 cm, 6 cm și 7 cm este egal cucm³.

3) Aria laterală a unei piramide patrulatere regulată cu latura bazei de 5 cm și apotema de 4 cm este egală cucm².

4) Aria totală a unui cub cu latura de 8 cm egală cucm².

III. Asociați corpurile geometrice din coloana A cu imaginea lor desfășurată din coloana B .

A	B	Răspunsul elevului	Exemplu
<p>1.</p> 	<p>a)</p> 		5---→f)
<p>2.</p> 	<p>b)</p> 		
<p>3.</p> 	<p>c)</p> 		
<p>4.</p> 	<p>d)</p> 		
	<p>e)</p> 		

BAREM DE EVALUARE

I.	II.	III.
1) cub	1) cub, paralelipiped, 12,8.	1 → c)
2) paralelipiped dreptunghic	2) 210.	2 → b)
3) piramida patrulateră	3) 40.	3 → e)
regulată	4) 384.	4 → a)
4) piramida triunghiulară		
regulată		
5) prismă triunghiulară		
regulată dreaptă		